


Graphing Quadratic Equations Name _____

Graph the equation. What are the roots of the equation?


1. $y = -x^2 + 4$




2. $y = 2x^2 + 1$




3. $y = -x^2 - 3x$



4. $y = 3x^2 - x + 2$



5. $y = x^2 + 2x - 4$



6. $y = -x^2 + 3x + 1$

